

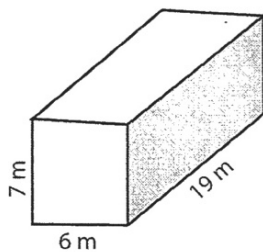
Name : \_\_\_\_\_

HW 7.1

### Volume - Rectangular Prism

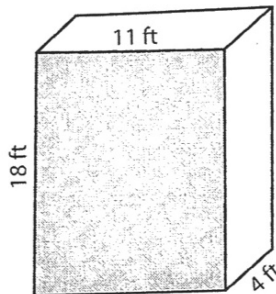
Find the volume of each rectangular prism.

1)



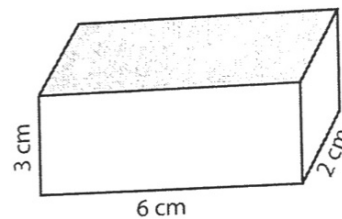
Volume = \_\_\_\_\_

2)



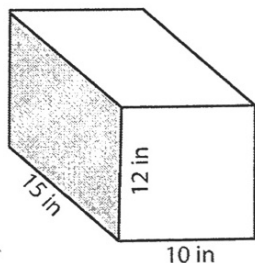
Volume = \_\_\_\_\_

3)



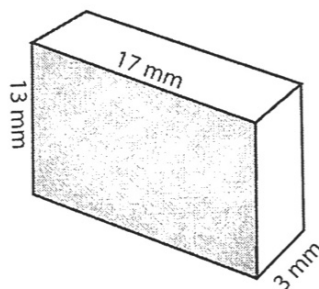
Volume = \_\_\_\_\_

4)



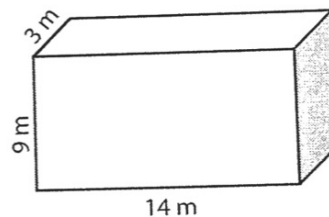
Volume = \_\_\_\_\_

5)



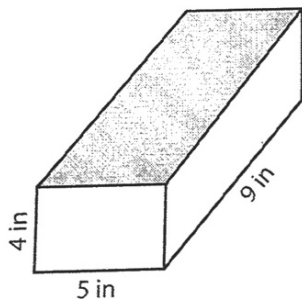
Volume = \_\_\_\_\_

6)



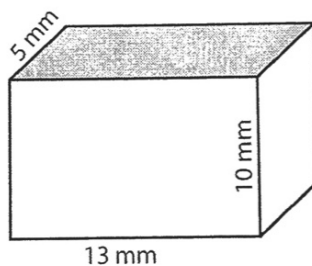
Volume = \_\_\_\_\_

7)



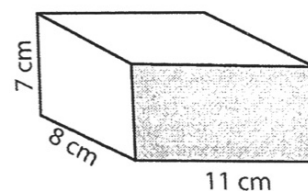
Volume = \_\_\_\_\_

8)



Volume = \_\_\_\_\_

9)



Volume = \_\_\_\_\_

10) A water-tank has a dimension of 60 feet x 30 feet x 20 feet. What is the volume of the water-tank?

Volume = \_\_\_\_\_